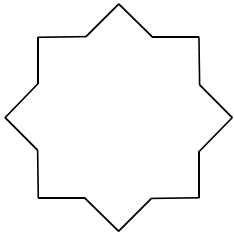



1 Colorie chaque polygone et sa description de la même couleur.




Je suis un polygone.
J'ai 12 côtés.




Je suis un polygone.
J'ai 10 sommets.


Je ne suis pas
un polygone.







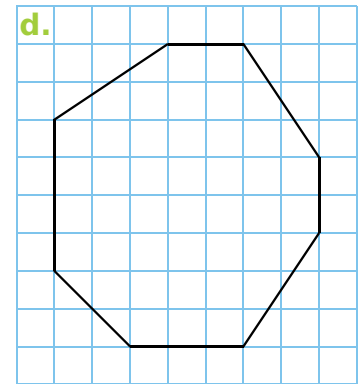
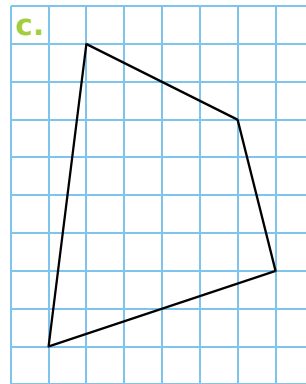
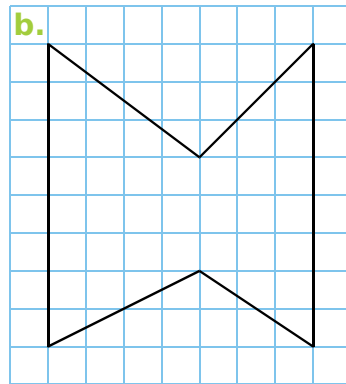
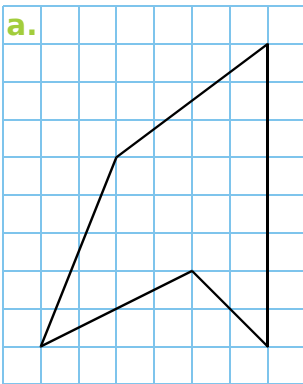
Je suis un polygone.
J'ai 8 sommets.



Je suis un polygone.
J'ai 16 côtés.



2 Reproduis chaque polygone.



3 Complète le tableau en considérant les polygones de l'exercice 2.

| Polygone | a. | b. | c. | d. |
|-------------------|----|----|----|----|
| Nombre de côtés | | | | |
| Nombre de sommets | | | | |

4 Trace un polygone à 7 côtés et 7 sommets.